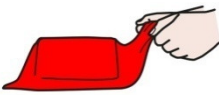



MATEMÀTIQUES

Calcula les següents operacions:


$$\begin{array}{r} 6 \\ - 2 \\ \hline \end{array}$$

 2 ●

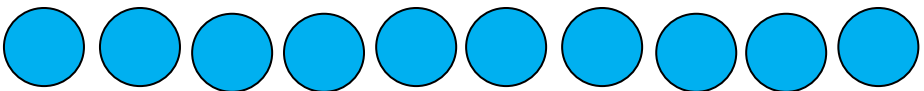
Tapa




$$\begin{array}{r} 10 \\ - 3 \\ \hline \end{array}$$

 3 ●


Tapa



$$\begin{array}{r} 5 \\ - 1 \\ \hline \end{array}$$

 1 ●


Tapa






Tapa

$$\begin{array}{r} 8 \\ - 4 \\ \hline \end{array}$$



Tapa

$$\begin{array}{r} 9 \\ - 3 \\ \hline \end{array}$$



Tapa

$$\begin{array}{r} 7 \\ - 5 \\ \hline \end{array}$$



Tapa

$$\begin{array}{r} 3 \\ - 3 \\ \hline \end{array}$$

